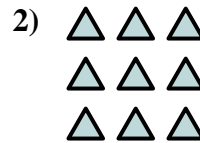





Write an equation to express the array and then find the number of shapes.

Answers





Ex. $2 \times 2 = 4$

1. _____

2. _____

3. _____





4. _____

5. _____

6. _____

7. _____


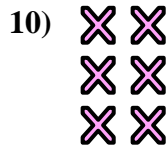


8. _____

9. _____

10. _____



11. _____



12. _____

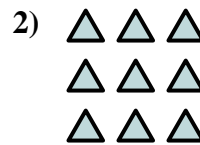

13. _____

14. _____





Write an equation to express the array and then find the number of shapes.



Answers

Ex. $2 \times 2 = 4$

1. $5 \times 2 = 10$

2. $3 \times 3 = 9$

3. $2 \times 3 = 6$

4. $3 \times 4 = 12$

5. $4 \times 2 = 8$

6. $5 \times 4 = 20$

7. $3 \times 5 = 15$

8. $5 \times 3 = 15$

9. $2 \times 5 = 10$

10. $3 \times 2 = 6$

11. $4 \times 3 = 12$

12. $4 \times 5 = 20$

13. $4 \times 4 = 16$

14. $2 \times 4 = 8$

